

Write the times as minutes *after* an hour and minutes *before* an hour.

1



2



3



4



5




6



7



8



9



Divide the number line into the correct unit fractions. Then label each point. Show the target fraction by looping the unit fractions that make it.

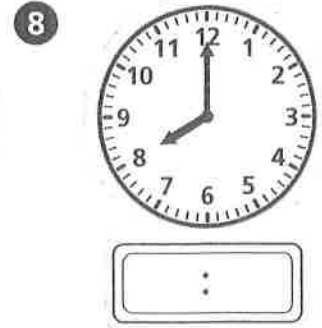




Write an equation and solve the problem.

- 3 Joey counts the windows on the 3-floor building. There are 6 windows on each floor. How many windows does he count?
- _____

- 4 Kiara gives Mrs. King's class 23 erasers. She has 59 erasers left in the supply drawer. How many erasers did Kiara start with?
- _____

Write the time on the digital clock. Then write how to say the time.



- 9 **Stretch Your Thinking** List five different times in which the minutes before are the same as the minutes after the hour.
- _____