

Compare. Use $<$, $>$, or $=$.

1 $\frac{3}{4} \bigcirc \frac{3}{8}$

2 $\frac{2}{6} \bigcirc \frac{2}{5}$

3 $\frac{5}{7} \bigcirc \frac{2}{7}$

4 $\frac{1}{6} \bigcirc \frac{1}{8}$

5 $\frac{5}{8} \bigcirc \frac{3}{8}$

6 $\frac{4}{6} \bigcirc \frac{5}{6}$

7 $\frac{4}{4} \bigcirc \frac{3}{3}$

8 $\frac{3}{5} \bigcirc \frac{3}{8}$

9 $\frac{3}{4} \bigcirc \frac{2}{3}$

10 $\frac{2}{4} \bigcirc \frac{4}{4}$

11 $\frac{5}{7} \bigcirc \frac{5}{8}$

12 $\frac{3}{3} \bigcirc \frac{4}{4}$

13 $\frac{8}{8} \bigcirc \frac{6}{8}$

14 $\frac{8}{8} \bigcirc \frac{6}{6}$

15 $\frac{8}{6} \bigcirc \frac{5}{6}$

16 $\frac{4}{8} \bigcirc \frac{6}{8}$

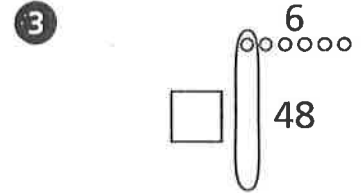
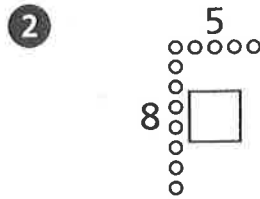
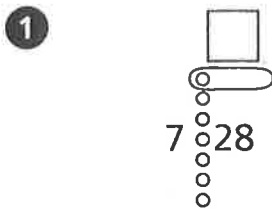
Solve.

Show your work.

- 17 Selena got 5 out of 6 answers correct on her science quiz. Her friend Ana got 4 answers out of 6 correct on her science quiz. Which friend answered a greater fraction of the questions correctly?
-

- 18 Jay ate $\frac{2}{3}$ of a pepperoni pizza. Darrell ate $\frac{2}{4}$ of a mushroom pizza. If the pizza pans are the same size, who ate a greater fraction of a whole pizza?
-

Find the unknown number in the Fast Array drawing.

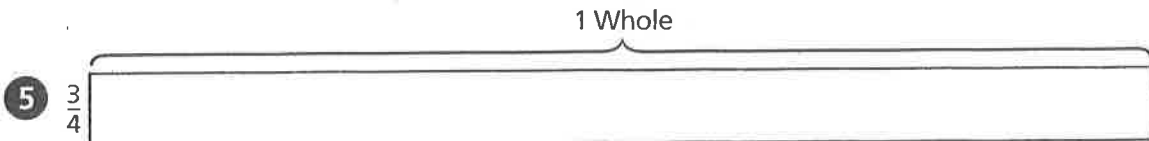


Read the problem. Then follow the directions below the problem. Here is an addition word problem:

In the stands at the football game, there are 136 people sitting. There are also 49 people standing. How many people are in the stands?

- ④ Solve the problem. _____

Shade the fraction bar to show the fraction. First, divide the fraction bar into the correct unit fractions.




Use the diagram. Write $<$ or $>$ to compare the unit fractions.

⑥ $\frac{1}{3}$ ○ $\frac{1}{5}$

⑦ $\frac{1}{6}$ ○ $\frac{1}{4}$

⑧ $\frac{1}{3}$ ○ $\frac{1}{6}$

⑨ $\frac{1}{5}$ ○ $\frac{1}{2}$



- ⑩ **Stretch Your Thinking** Lauren, Amanda, and Cami each buy the same size pizza. Cami eats $\frac{1}{2}$ of her pizza. Amanda eats less than Cami. Lauren eats more than Cami. Write two fractions for both Amanda and Lauren to show how much pizza the girls eat.
- _____